

Name : _____

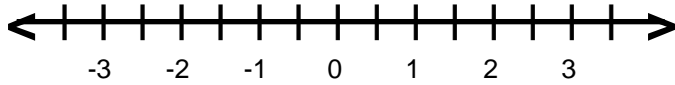
Score : _____

Teacher : _____

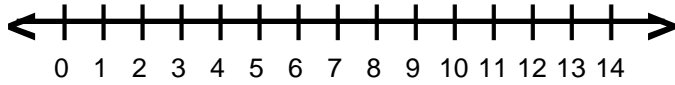
Date : _____

Graphing Inequalities

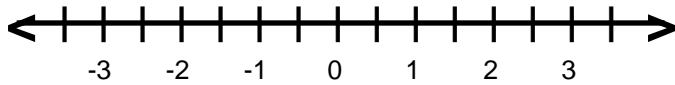
1) $-h > 2.5$



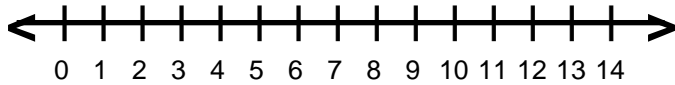
2) $10 \geq x$



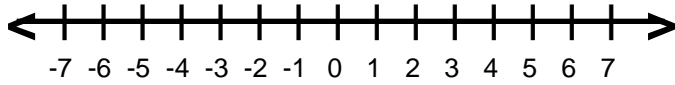
3) $-2.5 > -r$



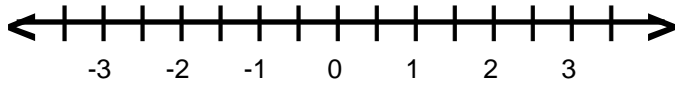
4) $10 \leq m$



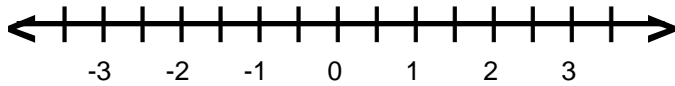
5) $3 < -s$



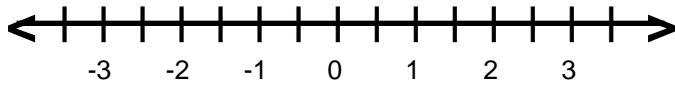
6) $p \leq 0.5$



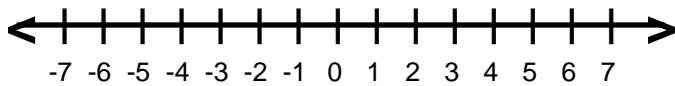
7) $-1.5 < x$



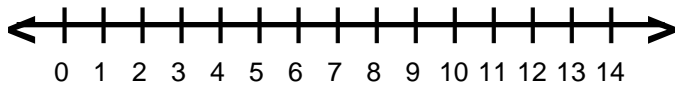
8) $s \leq 2.5$



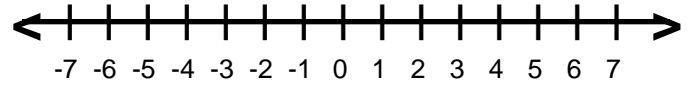
9) $b \geq 4$



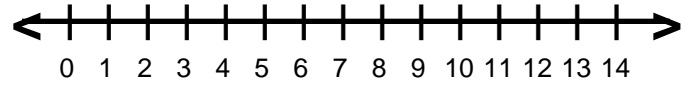
10) $9 < n$



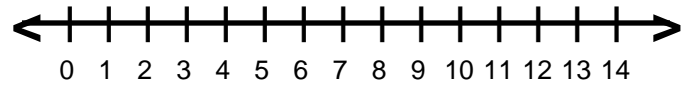
11) $1 > -p$



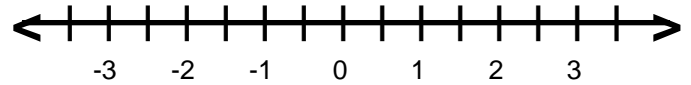
12) $g \leq 5$



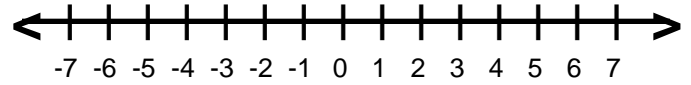
13) $v > 2$



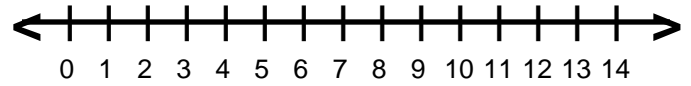
14) $-1 \geq -h$



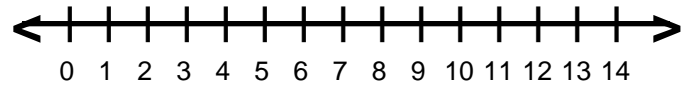
15) $-k \leq 4$



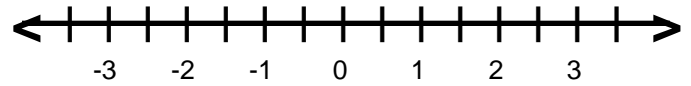
16) $v > 7$



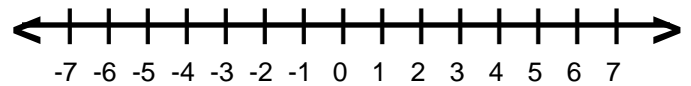
17) $c < 6$



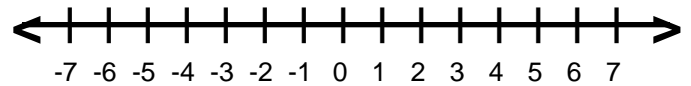
18) $-1.5 \geq g$



19) $-2 \geq j$



20) $-w < -3$



Name : _____

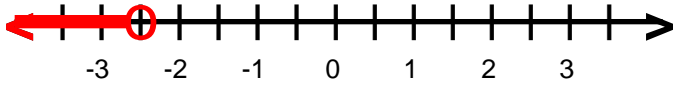
Score : _____

Teacher : _____

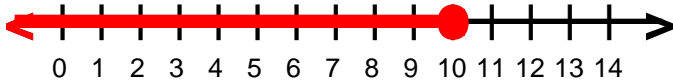
Date : _____

Graphing Inequalities

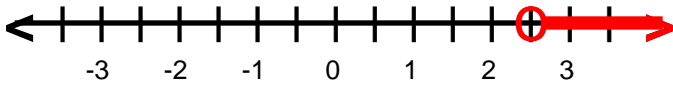
1) $-h > 2.5$ or $h < -2.5$



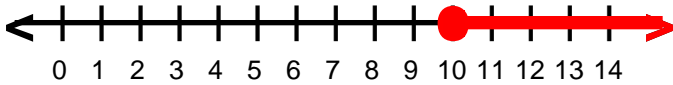
2) $10 \geq x$



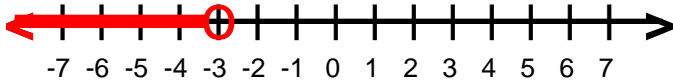
3) $-2.5 \geq -r$ or $2.5 < r$



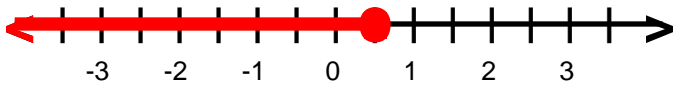
4) $10 \leq m$



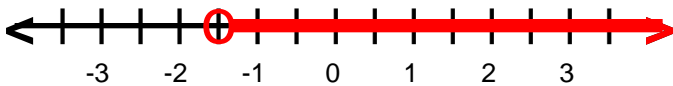
5) $3 < -s$ or $-3 > s$



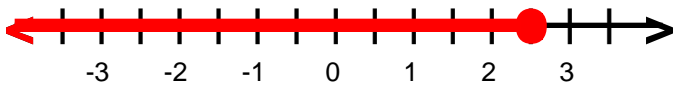
6) $p \leq 0.5$



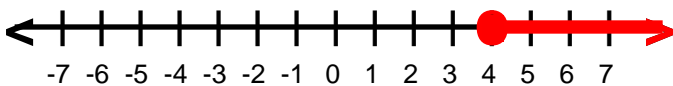
7) $-1.5 < x$



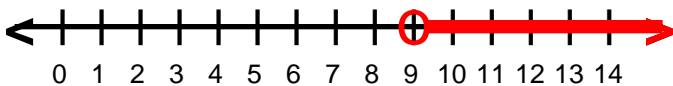
8) $s \leq 2.5$



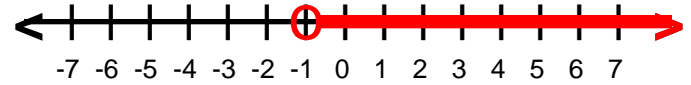
9) $b \geq 4$



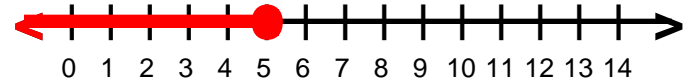
10) $9 < n$



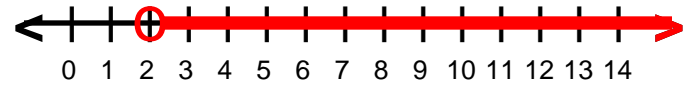
11) $1 > -p$ or $-1 < p$



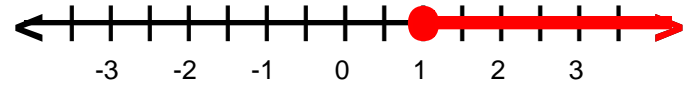
12) $g \leq 5$



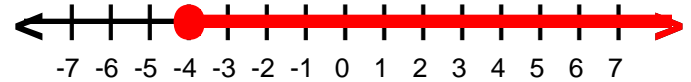
13) $v \geq 2$



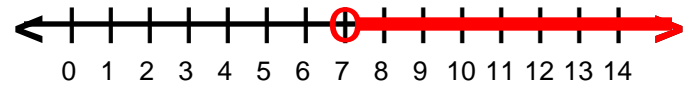
14) $-1 \geq -h$ or $1 \leq h$



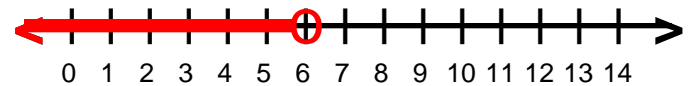
15) $-k \leq 4$ or $k \geq -4$



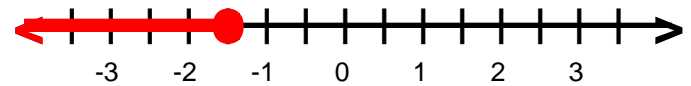
16) $v \geq 7$



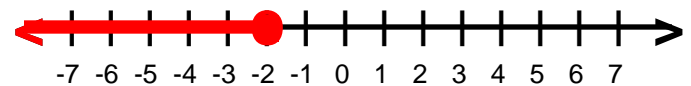
17) $c < 6$



18) $-1.5 \geq g$



19) $-2 \geq j$



20) $-w < -3$ or $w > 3$

